



The Lady With Alligator Purse




LOVETWOTEACH


The Alligator Purse




By: _____




Mother, Mother, I am ill.




In came the doctor.



In, came the nurse.



In came the lady,



with the alligator purse.

Name: _____

Addition Facts

Cut out the Alligator Purse to help you find the answers!

$11 + 5 =$

$4 + 2 =$

$8 + 3 =$

$9 + 2 =$

$3 + 3 =$

$5 + 3 =$

$5 + 4 =$

$6 + 2 =$

$4 + 2 =$

$4 + 3 =$

$5 + 6 =$

$2 + 3 =$

$2 + 5 =$

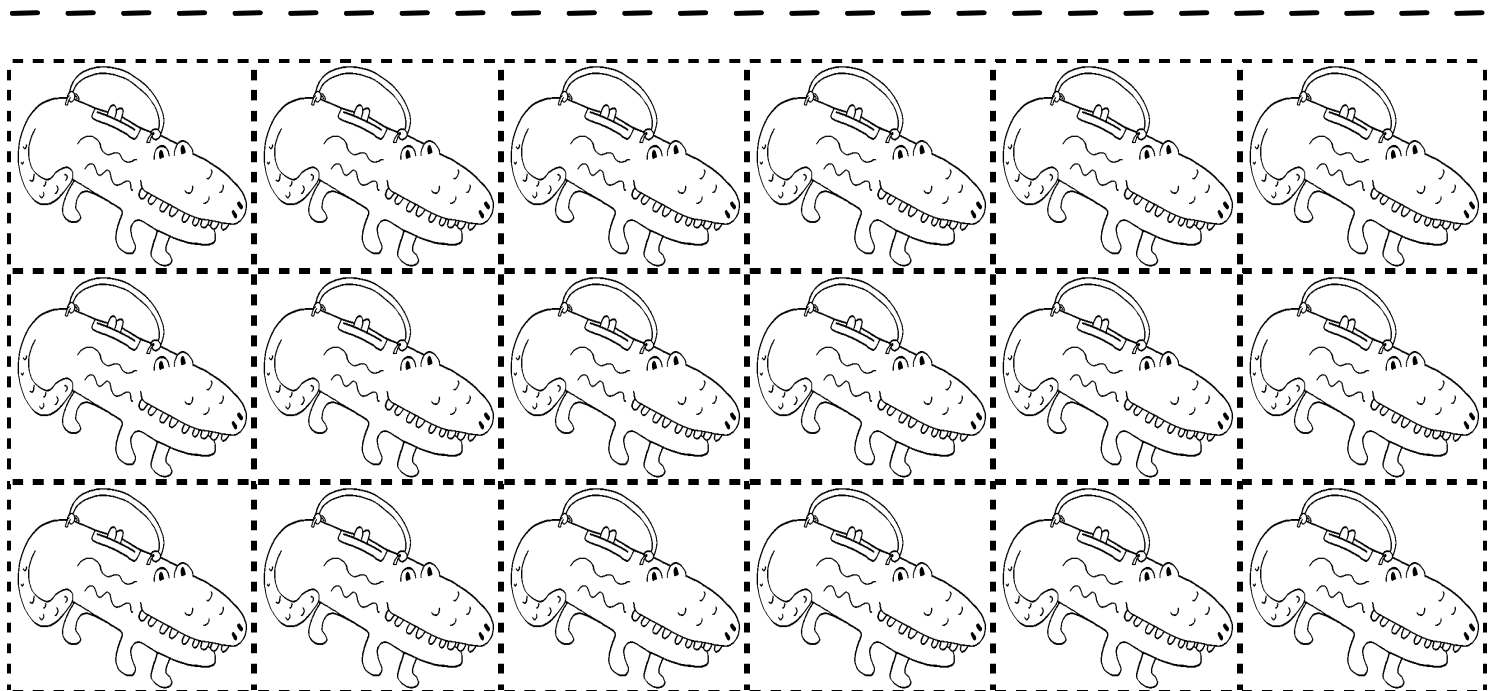
$4 + 4 =$

$7 + 1 =$

$10 + 1 =$

$5 + 7 =$

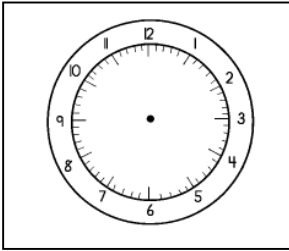
$8 + 4 =$



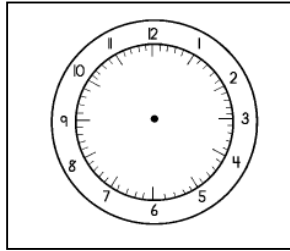
Name: _____

Date: _____

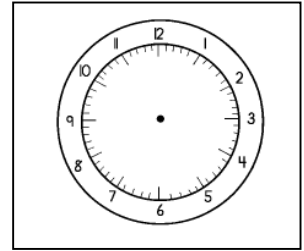
Draw the hands on the clock to match the time.



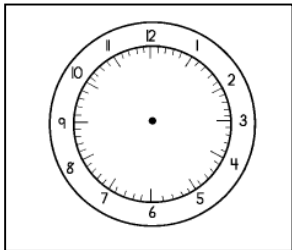
5:00



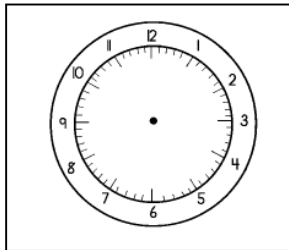
10:00



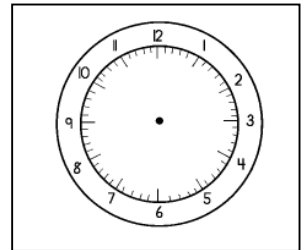
4:00



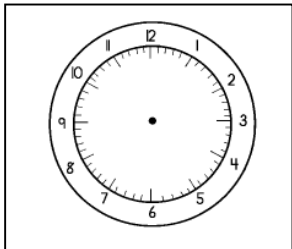
8:00



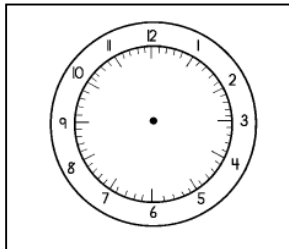
9:00




12:00



7:00



3:00



Name: _____

Subtraction Facts

$15 - 5 =$

$10 - 10 =$

$16 - 5 =$

$16 - 12 =$

$14 - 12 =$

$12 - 9 =$

$18 - 4 =$

$10 - 8 =$

$16 - 2 =$

$16 - 4 =$

$15 - 5 =$

$16 - 7 =$

$10 - 4 =$

$16 - 5 =$


$9 - 6 =$

$20 - 5 =$

$10 - 6 =$

$11 - 2 =$

$18 - 5 =$



Name: _____

Date: _____

Addition Facts

$15 + 3 =$

$12 + 10 =$

$18 + 3 =$

$19 + 12 =$

$16 + 12 =$

$15 + 4 =$

$23 + 4 =$

$22 + 10 =$

$20 + 2 =$

$18 + 4 =$

$15 + 5 =$

$10 + 7 =$

$15 + 4 =$

$14 + 2 =$


$18 + 5 =$

$20 + 5 =$

$16 + 6 =$

$18 + 2 =$


$10 + 5 =$



Name: _____

The Lady with the Alligator Purse

Draw a picture about your favorite part of the book.




Write about your favorite part from the book.

Four sets of handwriting lines, each consisting of a solid top line, a dashed middle line, and a solid bottom line, for writing a response.

Name: _____

The Lady with the Alligator Purse

Draw a picture of what you think was in the purse.

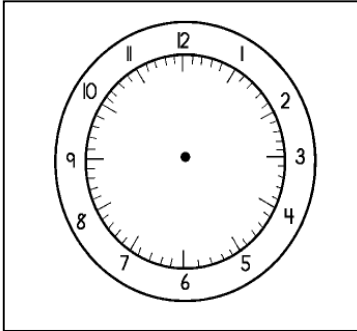



Write about what was in the purse.

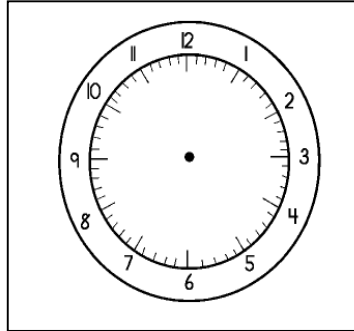
Name: _____

Telling Time

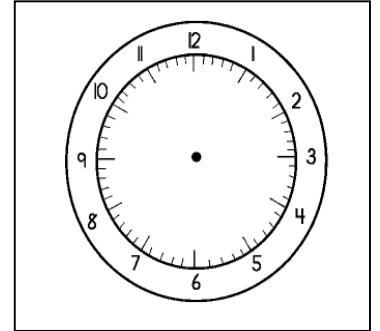
Draw the hands on the clock to match the time.



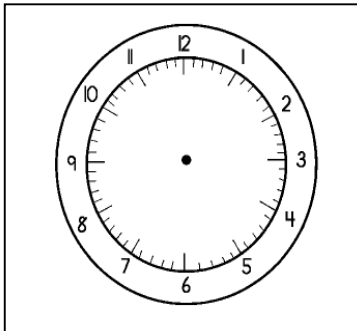
6:50



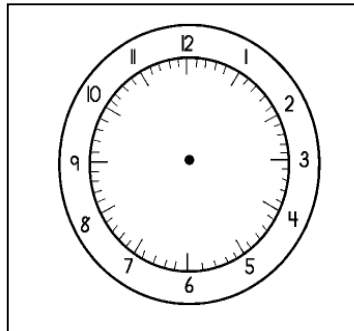
2:25



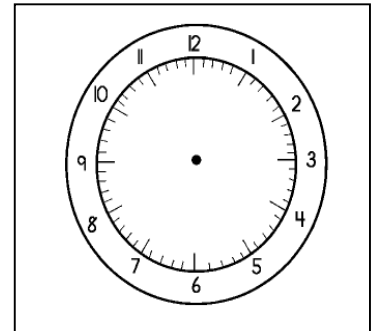
4:35



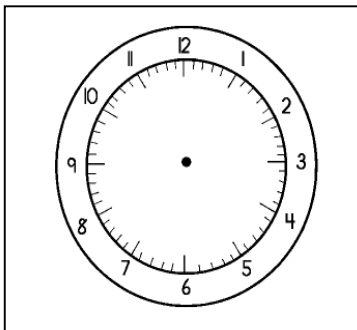
9:15



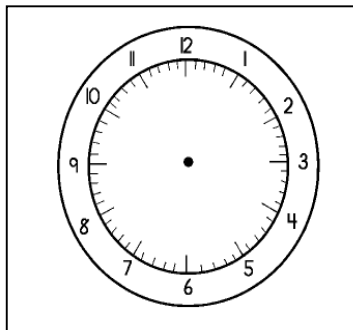
10:12



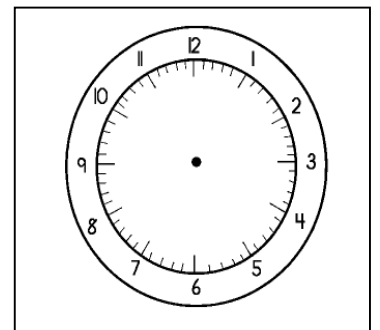
7:57



5:17



10:23



8:45

Name: _____

Subtraction Facts

Cut out The Doctor to help you find the answers!

$13 - 3 =$

$10 - 1 =$

$7 - 2 =$

$6 - 2 =$

$9 - 5 =$

$10 - 3 =$

$7 - 4 =$

$8 - 5 =$

$5 - 1 =$

$9 - 2 =$


$10 - 3 =$

$8 - 7 =$

$10 - 5 =$

$9 - 6 =$

$4 - 1 =$



Name: _____

Date: _____

Addition Facts

$$\begin{array}{r} 35 \\ + 22 \\ \hline \end{array}$$

$$\begin{array}{r} 37 \\ + 15 \\ \hline \end{array}$$

$$\begin{array}{r} 25 \\ + 14 \\ \hline \end{array}$$

$$\begin{array}{r} 18 \\ + 5 \\ \hline \end{array}$$

$$\begin{array}{r} 22 \\ + 7 \\ \hline \end{array}$$

$$\begin{array}{r} 23 \\ + 12 \\ \hline \end{array}$$

$$\begin{array}{r} 10 \\ + 12 \\ \hline \end{array}$$

$$\begin{array}{r} 27 \\ + 2 \\ \hline \end{array}$$

$$\begin{array}{r} 32 \\ + 25 \\ \hline \end{array}$$

$$\begin{array}{r} 17 \\ + 11 \\ \hline \end{array}$$

$$\begin{array}{r} 14 \\ + 8 \\ \hline \end{array}$$

$$\begin{array}{r} 13 \\ + 7 \\ \hline \end{array}$$

$$\begin{array}{r} 20 \\ + 22 \\ \hline \end{array}$$

$$\begin{array}{r} 22 \\ + 12 \\ \hline \end{array}$$

$$\begin{array}{r} 22 \\ + 5 \\ \hline \end{array}$$

$$\begin{array}{r} 25 \\ + 12 \\ \hline \end{array}$$

$$\begin{array}{r} 20 \\ + 5 \\ \hline \end{array}$$

$$\begin{array}{r} 16 \\ + 9 \\ \hline \end{array}$$

$$\begin{array}{r} 17 \\ + 11 \\ \hline \end{array}$$

$$\begin{array}{r} 13 \\ + 10 \\ \hline \end{array}$$

$$\begin{array}{r} 19 \\ + 11 \\ \hline \end{array}$$

$$\begin{array}{r} 20 \\ + 22 \\ \hline \end{array}$$

$$\begin{array}{r} 25 \\ + 22 \\ \hline \end{array}$$


$$\begin{array}{r} 31 \\ + 8 \\ \hline \end{array}$$

$$\begin{array}{r} 15 \\ + 12 \\ \hline \end{array}$$

$$\begin{array}{r} 28 \\ + 22 \\ \hline \end{array}$$

$$\begin{array}{r} 33 \\ + 22 \\ \hline \end{array}$$

$$\begin{array}{r} 25 \\ + 22 \\ \hline \end{array}$$



Name: _____

Date: _____


Addition Facts

$$\begin{array}{r} 625 \\ +482 \\ \hline \end{array}$$

$$\begin{array}{r} 736 \\ + 335 \\ \hline \end{array}$$

$$\begin{array}{r} 785 \\ + 454 \\ \hline \end{array}$$

$$\begin{array}{r} 126 \\ + 125 \\ \hline \end{array}$$



$$\begin{array}{r} 596 \\ +302 \\ \hline \end{array}$$

$$\begin{array}{r} 963 \\ +562 \\ \hline \end{array}$$

$$\begin{array}{r} 652 \\ +402 \\ \hline \end{array}$$

$$\begin{array}{r} 676 \\ + 212 \\ \hline \end{array}$$

$$\begin{array}{r} 721 \\ + 555 \\ \hline \end{array}$$

$$\begin{array}{r} 445 \\ + 431 \\ \hline \end{array}$$

$$\begin{array}{r} 514 \\ +728 \\ \hline \end{array}$$

$$\begin{array}{r} 873 \\ + 217 \\ \hline \end{array}$$

$$\begin{array}{r} 683 \\ + 22 \\ \hline \end{array}$$

$$\begin{array}{r} 522 \\ +342 \\ \hline \end{array}$$

$$\begin{array}{r} 122 \\ +326 \\ \hline \end{array}$$

$$\begin{array}{r} 325 \\ + 262 \\ \hline \end{array}$$

$$\begin{array}{r} 445 \\ + 625 \\ \hline \end{array}$$

$$\begin{array}{r} 836 \\ + 369 \\ \hline \end{array}$$

$$\begin{array}{r} 587 \\ + 123 \\ \hline \end{array}$$

$$\begin{array}{r} 993 \\ + 101 \\ \hline \end{array}$$

$$\begin{array}{r} 589 \\ + 301 \\ \hline \end{array}$$

$$\begin{array}{r} 201 \\ +452 \\ \hline \end{array}$$

$$\begin{array}{r} 325 \\ +572 \\ \hline \end{array}$$

$$\begin{array}{r} 501 \\ +478 \\ \hline \end{array}$$

$$\begin{array}{r} 105 \\ +781 \\ \hline \end{array}$$

$$\begin{array}{r} 328 \\ + 881 \\ \hline \end{array}$$

$$\begin{array}{r} 533 \\ + 622 \\ \hline \end{array}$$

$$\begin{array}{r} 555 \\ + 52 \\ \hline \end{array}$$

Name: _____

Date: _____


Addition Facts

Fill in the missing numbers to complete the problems.

$$\begin{array}{r} 2__ \\ + 49 \\ \hline 76 \end{array}$$

$$\begin{array}{r} 3__ \\ + 18 \\ \hline 50 \end{array}$$

$$\begin{array}{r} 9__ \\ + 63 \\ \hline 160 \end{array}$$



$$\begin{array}{r} 5__ \\ + 35 \\ \hline 86 \end{array}$$

$$\begin{array}{r} 2__ \\ + 62 \\ \hline 84 \end{array}$$

$$\begin{array}{r} 4__ \\ + 61 \\ \hline 102 \end{array}$$

$$\begin{array}{r} 5__ \\ + 36 \\ \hline 91 \end{array}$$

$$\begin{array}{r} 7__ \\ + 65 \\ \hline 139 \end{array}$$

$$\begin{array}{r} 5__ \\ + 34 \\ \hline 92 \end{array}$$

$$\begin{array}{r} 8__ \\ + 2 \\ \hline 94 \end{array}$$

$$\begin{array}{r} 2__ \\ + 89 \\ \hline 113 \end{array}$$

$$\begin{array}{r} 7__ \\ + 5 \\ \hline 86 \end{array}$$

$$\begin{array}{r} 8__ \\ + 2 \\ \hline 93 \end{array}$$

$$\begin{array}{r} 5__ \\ + 5 \\ \hline 77 \end{array}$$

Name: _____


Date: _____

Title of Story: _____

Author: _____

Story Map

| | | |
|----------------------------------|--|----------------|
| <u>Main Characters</u> | | <u>Setting</u> |
| <u>Problem of Story</u> | | |
| <u>A Story Event</u> | | |
| <u>How the Problem Is Solved</u> | | |
| <u>The Ending</u> | | |



Name: _____

Date: _____

The Lady With the Alligator Purse




Write a story about what the Lady with the Alligator Purse did when she came to the house.

Illustrate your story:



Write your story:

Handwriting practice lines consisting of ten sets of three horizontal lines (top solid, middle dashed, bottom solid).



Name: _____

Date: _____

Put the words related to The Lady With the Alligator Purse in alphabetical order.

ill

doctor

nurse

alligator

purse

call

came

1. _____

2. _____


3. _____

4. _____

5. _____

6. _____

7. _____



Name: _____

Date: _____

