




*Amelia Bedelia*





*LoveTwoTeach*














Name: \_\_\_\_\_

Date: \_\_\_\_\_

Title of Story: \_\_\_\_\_

Author: \_\_\_\_\_

### Story Map

<u>Main Characters</u>		<u>Setting</u>
<u>Problem of Story</u>		
<u>A Story Event</u>		
<u>How the Problem Is Solved</u>		
<u>The Ending</u>		



Name: \_\_\_\_\_

Date: \_\_\_\_\_

What was your favorite part of the story?

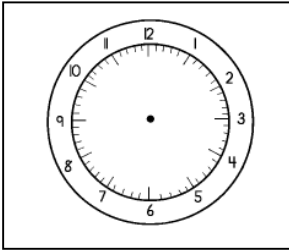


Handwriting practice lines consisting of solid top and bottom lines with a dashed middle line, repeated seven times.

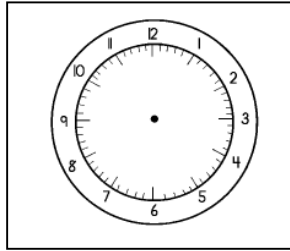
Name: \_\_\_\_\_

Date: \_\_\_\_\_

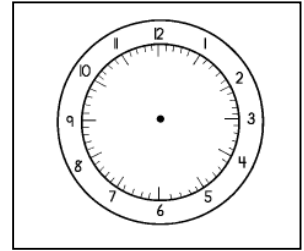
Draw the hands to match the time.



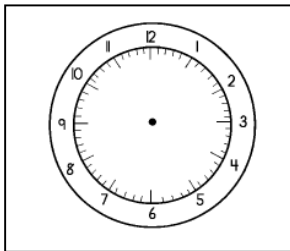
10:57



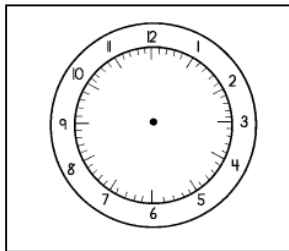
6:33



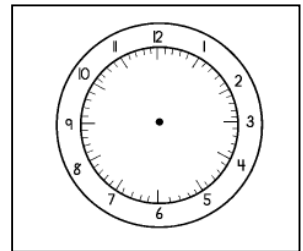
12:13



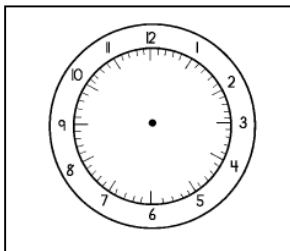
6:17



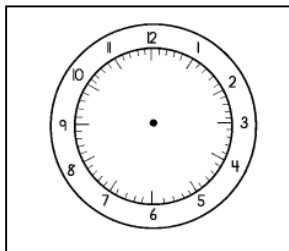
8:45




1:12



9:48



10:45



Name: \_\_\_\_\_

Date: \_\_\_\_\_

Multiplication Facts

$4 \times 9 =$

$10 \times 5 =$

$12 \times 3 =$

$12 \times 11 =$

$8 \times 4 =$

$8 \times 9 =$

$12 \times 5 =$

$9 \times 9 =$

$12 \times 4 =$

$6 \times 7 =$

$8 \times 6 =$

$4 \times 9 =$

$5 \times 6 =$

$3 \times 7 =$

$12 \times 5 =$

$3 \times 9 =$

$4 \times 5 =$

$5 \times 6 =$

$6 \times 6 =$

$3 \times 4 =$

$4 \times 6 =$

$11 \times 8 =$

$5 \times 5 =$

$8 \times 9 =$

$5 \times 7 =$

$5 \times 4 =$

$4 \times 8 =$

$10 \times 9 =$



Name: \_\_\_\_\_

## Addition Facts

$20 + 3 =$

$15 + 13 =$

$17 + 5 =$

$10 + 2 =$

$24 + 2 =$

$12 + 13 =$

$15 + 11 =$

$12 + 10 =$

$8 + 12 =$

$14 + 14 =$

$15 + 25 =$

$36 + 6 =$

$15 + 4 =$

$23 + 12 =$

$19 + 10 =$

$16 + 12 =$

$22 + 14 =$

$14 + 7 =$

$20 + 12 =$



Name: \_\_\_\_\_

Subtraction Facts

$13 - 5 =$

$12 - 10 =$

$17 - 5 =$

$16 - 12 =$

$4 - 12 =$

$15 - 3 =$

$25 - 4 =$

$22 - 10 =$

$18 - 2 =$

$14 - 4 =$

$15 - 5 =$

$16 - 7 =$

$15 - 4 =$

$13 - 5 =$

$19 - 6 =$

$20 - 5 =$

$12 - 6 =$

$18 - 2 =$

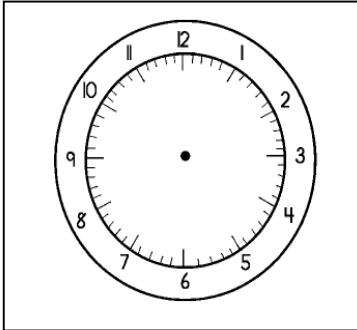

$10 - 5 =$



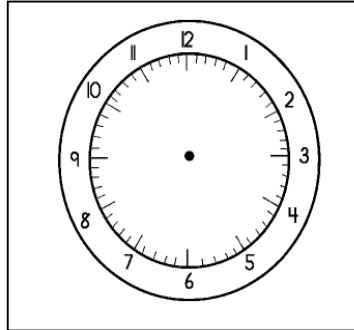
Name: \_\_\_\_\_

## Telling Time

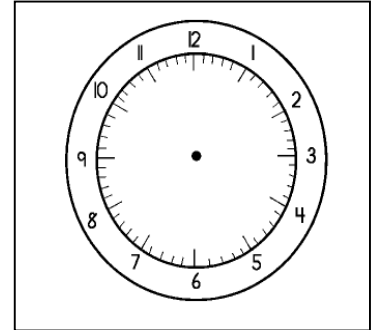
Draw the hands on the clock to match the time.



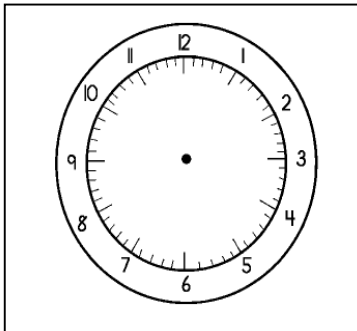
4:15



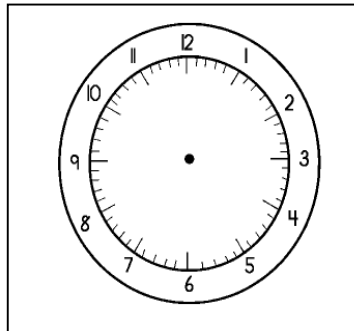
2:30



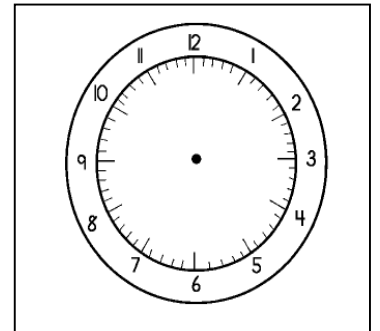
1:15



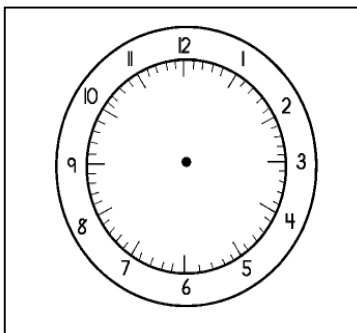
10:45



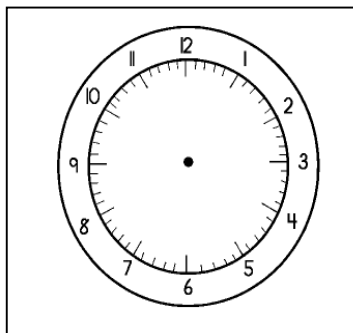
12:30



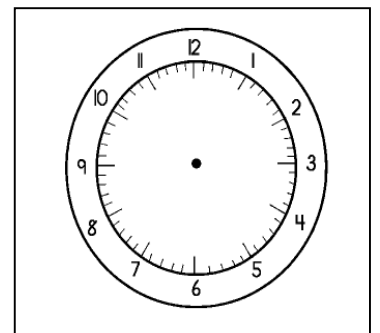
6:15



11:20



9:10



3:40

Name: \_\_\_\_\_

## Addition Facts

Cut out Amelia Bedelia to help you find the answers!

$9 + 3 =$

$10 + 1 =$

$8 + 2 =$

$10 + 2 =$

$4 + 5 =$

$6 + 3 =$

$4 + 4 =$

$5 + 2 =$

$8 + 1 =$

$9 + 2 =$


$7 + 3 =$

$9 + 3 =$

$11 + 5 =$

$13 + 3 =$

$14 + 1 =$



Name: \_\_\_\_\_

Date: \_\_\_\_\_

### Addition Facts

$$\begin{array}{r} 325 \\ +452 \\ \hline \end{array}$$

$$\begin{array}{r} 936 \\ + 211 \\ \hline \end{array}$$

$$\begin{array}{r} 985 \\ + 164 \\ \hline \end{array}$$

$$\begin{array}{r} 609 \\ + 51 \\ \hline \end{array}$$



$$\begin{array}{r} 396 \\ +402 \\ \hline \end{array}$$

$$\begin{array}{r} 463 \\ +422 \\ \hline \end{array}$$

$$\begin{array}{r} 652 \\ +402 \\ \hline \end{array}$$

$$\begin{array}{r} 676 \\ + 212 \\ \hline \end{array}$$

$$\begin{array}{r} 625 \\ + 412 \\ \hline \end{array}$$

$$\begin{array}{r} 445 \\ + 431 \\ \hline \end{array}$$

$$\begin{array}{r} 514 \\ +728 \\ \hline \end{array}$$

$$\begin{array}{r} 873 \\ + 217 \\ \hline \end{array}$$

$$\begin{array}{r} 683 \\ + 22 \\ \hline \end{array}$$

$$\begin{array}{r} 522 \\ +342 \\ \hline \end{array}$$

$$\begin{array}{r} 122 \\ +326 \\ \hline \end{array}$$

$$\begin{array}{r} 325 \\ + 262 \\ \hline \end{array}$$

$$\begin{array}{r} 811 \\ +172 \\ \hline \end{array}$$

$$\begin{array}{r} 256 \\ + 244 \\ \hline \end{array}$$

$$\begin{array}{r} 366 \\ +442 \\ \hline \end{array}$$

$$\begin{array}{r} 693 \\ + 201 \\ \hline \end{array}$$

$$\begin{array}{r} 589 \\ + 301 \\ \hline \end{array}$$

$$\begin{array}{r} 201 \\ +452 \\ \hline \end{array}$$

$$\begin{array}{r} 325 \\ +572 \\ \hline \end{array}$$

$$\begin{array}{r} 501 \\ +478 \\ \hline \end{array}$$

$$\begin{array}{r} 105 \\ +781 \\ \hline \end{array}$$

$$\begin{array}{r} 328 \\ + 671 \\ \hline \end{array}$$

$$\begin{array}{r} 333 \\ + 622 \\ \hline \end{array}$$

$$\begin{array}{r} 555 \\ + 52 \\ \hline \end{array}$$

Name: \_\_\_\_\_

Date: \_\_\_\_\_

### Addition Facts

Fill in the missing numbers to complete the problems.

$$\begin{array}{r} 2\_\_ \\ + 5 \\ \hline 74 \end{array}$$

$$\begin{array}{r} 3\_\_ \\ + 4 \\ \hline 56 \end{array}$$

$$\begin{array}{r} 8\_\_ \\ + 2 \\ \hline 103 \end{array}$$



$$\begin{array}{r} 2\_\_ \\ + 2 \\ \hline 69 \end{array}$$

$$\begin{array}{r} 5\_\_ \\ + 5 \\ \hline 110 \end{array}$$

$$\begin{array}{r} 4\_\_ \\ + 1 \\ \hline 89 \end{array}$$

$$\begin{array}{r} 5\_\_ \\ + 4 \\ \hline 86 \end{array}$$

$$\begin{array}{r} 7\_\_ \\ + 7 \\ \hline 99 \end{array}$$

$$\begin{array}{r} 3\_\_ \\ + 1 \\ \hline 44 \end{array}$$

$$\begin{array}{r} 8\_\_ \\ + 2 \\ \hline 94 \end{array}$$

$$\begin{array}{r} 1\_\_ \\ + 7 \\ \hline 34 \end{array}$$

$$\begin{array}{r} 6\_\_ \\ + 5 \\ \hline 86 \end{array}$$

$$\begin{array}{r} 7\_\_ \\ + 2 \\ \hline 93 \end{array}$$

$$\begin{array}{r} 4\_\_ \\ + 5 \\ \hline 77 \end{array}$$


Name: \_\_\_\_\_

Date: \_\_\_\_\_

Do you think Amelia will make any more mistakes when reading her to do list? What will happen to Mrs. Roger's house the next time she leaves Amelia alone to clean? Write your story.



Handwriting practice lines consisting of ten sets of three horizontal lines (top, middle dashed, bottom) for writing a story.



Handwriting practice lines consisting of a solid top line, a dashed middle line, and a solid bottom line. This section contains the first set of these lines.

Handwriting practice lines consisting of a solid top line, a dashed middle line, and a solid bottom line. This section contains the remaining sets of lines for the page.

Name: \_\_\_\_\_

Date: \_\_\_\_\_

## How well did you read?

Directions: Answer the following questions from the story. Circle the correct answer.

1. Where did the story Amelia Bedelia take place?
  - A. at Mrs. Roger's office
  - B. at Mr. Roger's office
  - C. at Mr. and Mrs. Roger's house
  - D. at a school
2. What did Amelia Bedelia do first?
  - A. made a pie
  - B. changed the towels
  - C. dusted the furniture
  - D. drew the curtains
3. When Amelia dusted the furniture, what did she use?
  - A. Dusting Powder
  - B. Furniture polish
  - C. Soap and Water
  - D. Wax
4. What did Amelia measure the rice with?
  - A. a measuring cup
  - B. a tape measurer
  - C. a shoe
  - D. a spoon
5. Mrs. Rogers was going to fire Amelia until...
  - A. tasted the lemon meringue pie
  - B. saw the curtain drawings
  - C. ate the chicken
  - D. looked at the furniture




Name: \_\_\_\_\_

Date: \_\_\_\_\_

## To Do List:

Directions: Make a "To Do List" for Amelia of things that you would like her to do for you in your house. Remember you have to be specific with the things you tell her.

Amelia,  
Please do the following things for me:



1. \_\_\_\_\_

\_\_\_\_\_

2. \_\_\_\_\_

\_\_\_\_\_

3. \_\_\_\_\_

\_\_\_\_\_

4. \_\_\_\_\_

\_\_\_\_\_

5. \_\_\_\_\_

\_\_\_\_\_

Thank you,


Name: \_\_\_\_\_

Date: \_\_\_\_\_

Write about what you would do if Amelia Bedelia worked at your house.



Handwriting practice lines consisting of multiple sets of three horizontal lines (top solid, middle dashed, bottom solid).



Handwriting practice lines consisting of a solid top line, a dashed middle line, and a solid bottom line. This section contains the first set of these lines.

Handwriting practice lines consisting of a solid top line, a dashed middle line, and a solid bottom line. This section contains the remaining sets of lines on the page.