


Arthur



Lovetwoteach


I See Arthur




By: _____




I see the Brain.




I see Buster.



I see Francine.



I see D.W.




I see Arthur.


I See Arthur




By: _____




I see the Brain.




I see Buster.



I see Francine.



I see D.W.



I see Arthur.

Name: _____

Addition Facts

Cut out Arthur to help you find the answers!

$4 + 5 =$

$3 + 2 =$

$7 + 3 =$

$8 + 2 =$

$2 + 3 =$

$6 + 3 =$

$5 + 4 =$

$6 + 2 =$

$4 + 2 =$

$4 + 3 =$


$5 + 3 =$

$3 + 3 =$

$2 + 5 =$

$6 + 4 =$

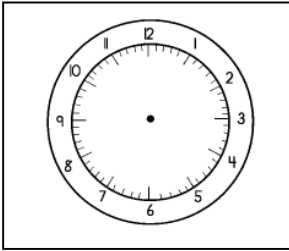
$7 + 1 =$



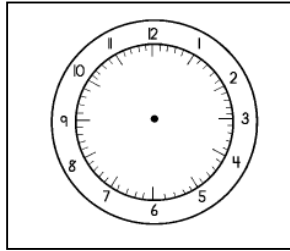
Name: _____

Date: _____

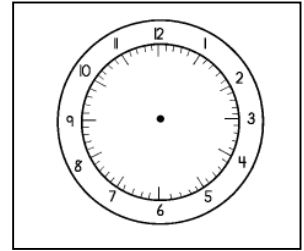
Draw the hands on the clock to match the time.



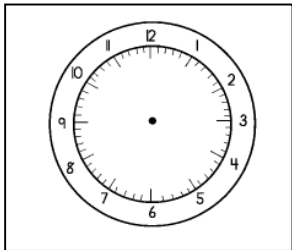
8:00



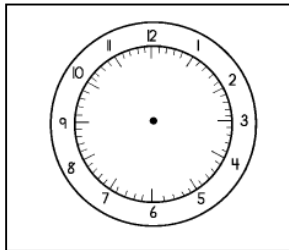
3:00



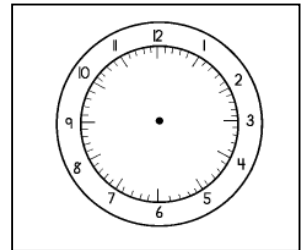
4:00



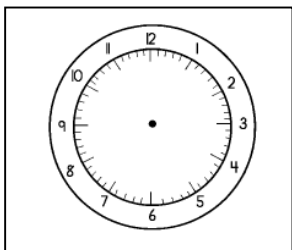
12:00



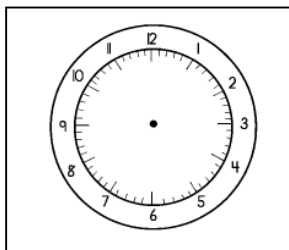
9:00




6:00



7:00



5:00



Name: _____

Subtraction Facts

$5 - 5 =$

$12 - 10 =$

$6 - 5 =$

$16 - 12 =$

$14 - 12 =$

$12 - 9 =$

$18 - 4 =$

$10 - 10 =$

$16 - 2 =$

$16 - 4 =$

$15 - 5 =$

$16 - 7 =$

$10 - 4 =$

$16 - 5 =$


$9 - 6 =$

$20 - 5 =$

$10 - 6 =$

$11 - 2 =$

$18 - 5 =$



Name: _____

Date: _____

Addition Facts

$14 + 3 =$

$12 + 10 =$

$18 + 3 =$

$19 + 12 =$

$16 + 12 =$

$15 + 3 =$

$23 + 4 =$

$22 + 10 =$

$20 + 2 =$

$18 + 4 =$

$15 + 5 =$

$10 + 7 =$

$15 + 4 =$

$14 + 2 =$


$18 + 5 =$

$20 + 5 =$

$16 + 6 =$

$18 + 2 =$


$10 + 5 =$



Name: _____

Arthur

Draw a picture about your favorite part of the book.

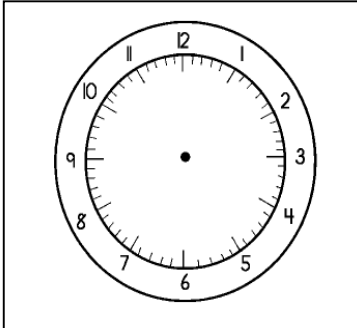



Write about your favorite part from the book.

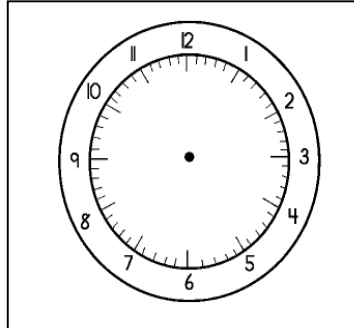
Name: _____

Telling Time

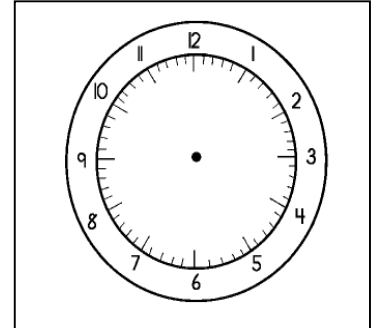
Draw the hands on the clock to match the time.



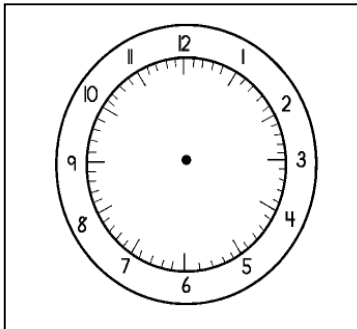
6:45



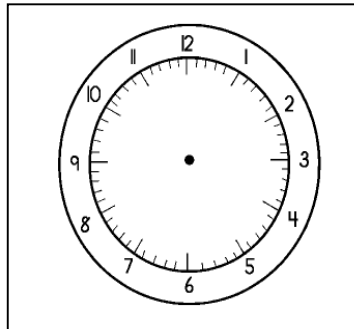
2:15



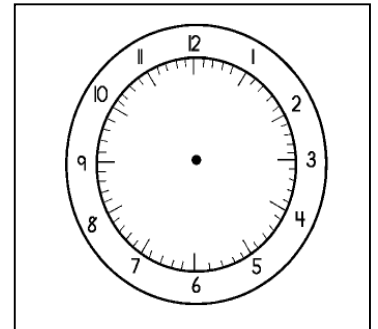
4:20



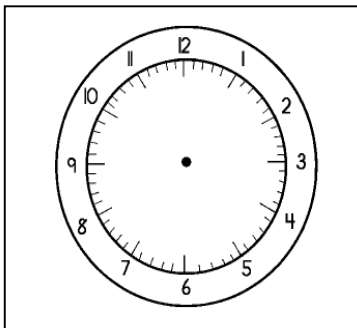
9:45



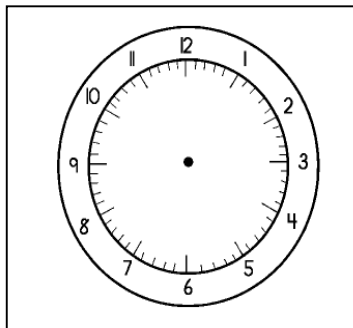
10:50



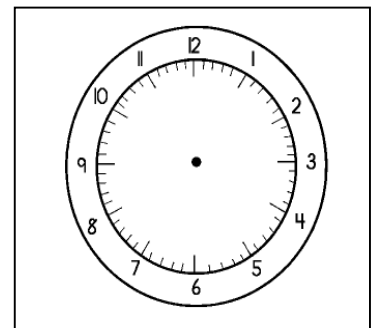
7:40



5:20



10:20



8:45

Name: _____

Subtraction Facts

Cut out Arthur to help you find the answers!

$12 - 3 =$

$10 - 1 =$

$7 - 2 =$

$6 - 2 =$

$9 - 5 =$

$10 - 3 =$

$7 - 4 =$

$8 - 5 =$

$5 - 1 =$

$9 - 2 =$


$10 - 3 =$

$8 - 7 =$

$10 - 5 =$

$9 - 6 =$

$4 - 1 =$



Name: _____

Date: _____

Addition Facts

$$\begin{array}{r} 25 \\ + 22 \\ \hline \end{array}$$

$$\begin{array}{r} 36 \\ + 15 \\ \hline \end{array}$$

$$\begin{array}{r} 15 \\ + 14 \\ \hline \end{array}$$

$$\begin{array}{r} 16 \\ + 5 \\ \hline \end{array}$$



$$\begin{array}{r} 18 \\ + 7 \\ \hline \end{array}$$

$$\begin{array}{r} 13 \\ + 12 \\ \hline \end{array}$$

$$\begin{array}{r} 12 \\ + 12 \\ \hline \end{array}$$

$$\begin{array}{r} 17 \\ + 2 \\ \hline \end{array}$$

$$\begin{array}{r} 27 \\ + 25 \\ \hline \end{array}$$

$$\begin{array}{r} 15 \\ + 11 \\ \hline \end{array}$$

$$\begin{array}{r} 14 \\ + 8 \\ \hline \end{array}$$

$$\begin{array}{r} 13 \\ + 7 \\ \hline \end{array}$$

$$\begin{array}{r} 23 \\ + 22 \\ \hline \end{array}$$

$$\begin{array}{r} 22 \\ + 2 \\ \hline \end{array}$$

$$\begin{array}{r} 25 \\ + 5 \\ \hline \end{array}$$

$$\begin{array}{r} 25 \\ + 12 \\ \hline \end{array}$$

$$\begin{array}{r} 20 \\ + 5 \\ \hline \end{array}$$

$$\begin{array}{r} 16 \\ + 9 \\ \hline \end{array}$$

$$\begin{array}{r} 17 \\ + 11 \\ \hline \end{array}$$

$$\begin{array}{r} 13 \\ + 10 \\ \hline \end{array}$$

$$\begin{array}{r} 19 \\ + 11 \\ \hline \end{array}$$

$$\begin{array}{r} 20 \\ + 22 \\ \hline \end{array}$$

$$\begin{array}{r} 25 \\ + 22 \\ \hline \end{array}$$

$$\begin{array}{r} 31 \\ + 8 \\ \hline \end{array}$$

$$\begin{array}{r} 15 \\ + 12 \\ \hline \end{array}$$

$$\begin{array}{r} 28 \\ + 22 \\ \hline \end{array}$$

$$\begin{array}{r} 33 \\ + 22 \\ \hline \end{array}$$

$$\begin{array}{r} 25 \\ + 22 \\ \hline \end{array}$$

Name: _____

Date: _____

Addition Facts

$$\begin{array}{r} 625 \\ +482 \\ \hline \end{array}$$

$$\begin{array}{r} 736 \\ + 335 \\ \hline \end{array}$$

$$\begin{array}{r} 785 \\ + 454 \\ \hline \end{array}$$

$$\begin{array}{r} 126 \\ + 125 \\ \hline \end{array}$$

$$\begin{array}{r} 596 \\ +302 \\ \hline \end{array}$$

$$\begin{array}{r} 963 \\ +562 \\ \hline \end{array}$$

$$\begin{array}{r} 652 \\ +402 \\ \hline \end{array}$$

$$\begin{array}{r} 676 \\ + 212 \\ \hline \end{array}$$

$$\begin{array}{r} 721 \\ + 555 \\ \hline \end{array}$$

$$\begin{array}{r} 445 \\ + 431 \\ \hline \end{array}$$

$$\begin{array}{r} 514 \\ +728 \\ \hline \end{array}$$

$$\begin{array}{r} 873 \\ + 217 \\ \hline \end{array}$$

$$\begin{array}{r} 683 \\ + 22 \\ \hline \end{array}$$

$$\begin{array}{r} 522 \\ +342 \\ \hline \end{array}$$

$$\begin{array}{r} 122 \\ +326 \\ \hline \end{array}$$

$$\begin{array}{r} 325 \\ + 262 \\ \hline \end{array}$$

$$\begin{array}{r} 445 \\ + 625 \\ \hline \end{array}$$

$$\begin{array}{r} 836 \\ + 369 \\ \hline \end{array}$$

$$\begin{array}{r} 587 \\ + 123 \\ \hline \end{array}$$

$$\begin{array}{r} 993 \\ + 101 \\ \hline \end{array}$$

$$\begin{array}{r} 589 \\ + 301 \\ \hline \end{array}$$

$$\begin{array}{r} 201 \\ +452 \\ \hline \end{array}$$

$$\begin{array}{r} 325 \\ +572 \\ \hline \end{array}$$


$$\begin{array}{r} 501 \\ +478 \\ \hline \end{array}$$

$$\begin{array}{r} 105 \\ +781 \\ \hline \end{array}$$

$$\begin{array}{r} 328 \\ + 881 \\ \hline \end{array}$$

$$\begin{array}{r} 533 \\ + 622 \\ \hline \end{array}$$

$$\begin{array}{r} 555 \\ + 52 \\ \hline \end{array}$$



Name: _____

Date: _____


Addition Facts

Fill in the missing numbers to complete the problems.

$$\begin{array}{r} 4 _ \\ + 5 \\ \hline 74 \end{array}$$

$$\begin{array}{r} 3 _ \\ + 4 \\ \hline 53 \end{array}$$

$$\begin{array}{r} 6 _ \\ + 2 \\ \hline 83 \end{array}$$



$$\begin{array}{r} 3 _ \\ + 7 \\ \hline 59 \end{array}$$

$$\begin{array}{r} 6 _ \\ + 5 \\ \hline 70 \end{array}$$

$$\begin{array}{r} 4 _ \\ + 1 \\ \hline 69 \end{array}$$

$$\begin{array}{r} 5 _ \\ + 4 \\ \hline 66 \end{array}$$

$$\begin{array}{r} 7 _ \\ + 7 \\ \hline 99 \end{array}$$

$$\begin{array}{r} 5 _ \\ + 1 \\ \hline 64 \end{array}$$

$$\begin{array}{r} 8 _ \\ + 2 \\ \hline 94 \end{array}$$

$$\begin{array}{r} 2 _ \\ + 7 \\ \hline 34 \end{array}$$

$$\begin{array}{r} 7 _ \\ + 5 \\ \hline 86 \end{array}$$

$$\begin{array}{r} 8 _ \\ + 2 \\ \hline 93 \end{array}$$

$$\begin{array}{r} 5 _ \\ + 5 \\ \hline 77 \end{array}$$

Name: _____


Date: _____

Title of Story: _____

Author: _____

Story Map

<u>Main Characters</u>		<u>Setting</u>
<u>Problem of Story</u>		
<u>A Story Event</u>		
<u>How the Problem Is Solved</u>		
<u>The Ending</u>		



Name: _____

Date: _____


My Adventures with Arthur!


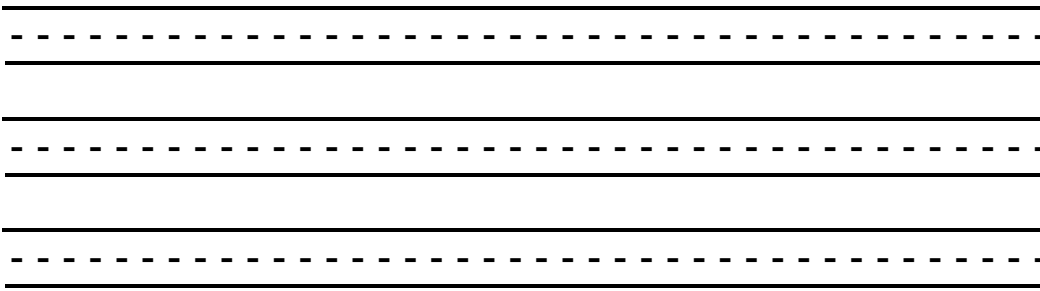

Write a story about an adventure with Arthur and his friends.

Illustrate your story:



Write your story:





Name: _____

Date: _____

Addition Word Problems

Solve the addition word problems. Show your work in the box!

1. Arthur read 8 books. D.W. read 4 books. How many books did they read in all?

2. Francine brought 14 toys to school. She lost 5 toys. How many toys does she have now?

3. The Brain read 18 books. Arthur read 6. Francine read 7. How many did they read total?

4. Arthur watched 16 movies. D.W. fell asleep for 5. How many movies did D.W. actually watch?



Name: _____

Date: _____

Put the words related to Arthur in alphabetical order.

Francine

Muffy

Arthur

glasses

school

sister

Buster

D.W.

1. _____

2. _____

3. _____


4. _____

5. _____

6. _____

7. _____

8. _____



Name: _____

Date: _____

