



FROGGY



LoveTwoTeach


Froggy



By: _____



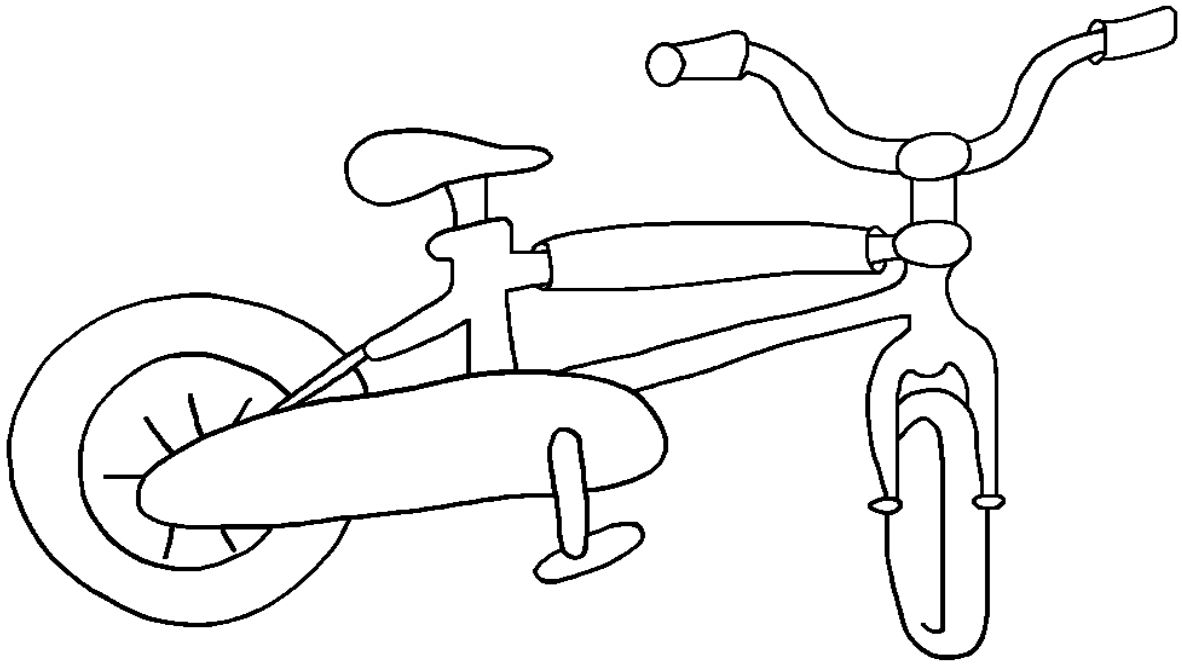
Froggy can hop.





Froggy can go to school.



Froggy can play soccer.



Froggy can ride a bike.



Froggy can be a friend.

Name: _____

Addition Facts

Cut out Froggy to help you find the answers!

$4 + 5 =$

$3 + 2 =$

$7 + 3 =$

$8 + 2 =$

$2 + 3 =$

$6 + 3 =$

$5 + 4 =$

$6 + 2 =$

$4 + 2 =$

$4 + 3 =$


$5 + 3 =$

$3 + 3 =$

$2 + 5 =$

$6 + 4 =$

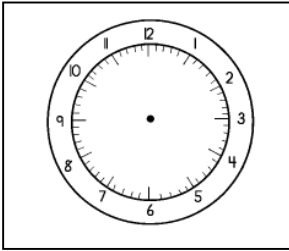
$7 + 1 =$



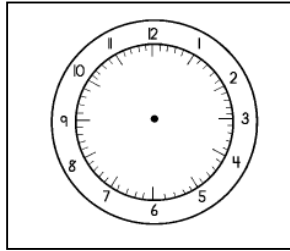
Name: _____

Date: _____

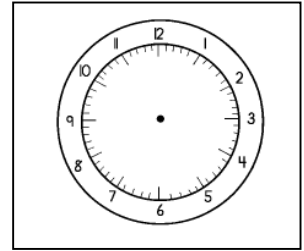
Draw the hands on the clock to match the time.



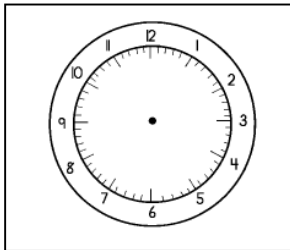
6:00



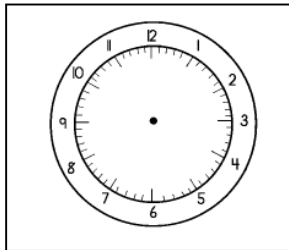
3:00



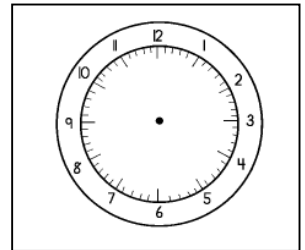
4:00



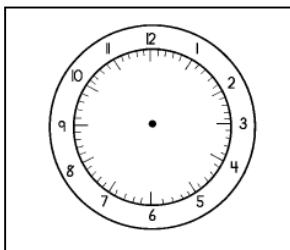
12:00



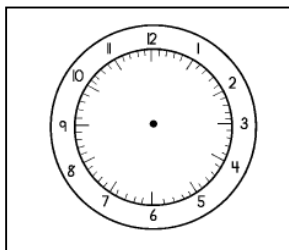
9:00




8:00



7:00



5:00



Name: _____

Subtraction Facts

$15 - 5 =$

$12 - 10 =$

$16 - 5 =$

$16 - 12 =$

$14 - 12 =$

$12 - 9 =$

$18 - 4 =$

$10 - 10 =$

$16 - 2 =$

$16 - 4 =$

$15 - 5 =$

$16 - 7 =$

$10 - 4 =$

$16 - 5 =$

$19 - 6 =$

$20 - 5 =$

$10 - 6 =$

$12 - 2 =$

$18 - 5 =$



Name: _____

Date: _____

Addition Facts

$20 + 3 =$

$12 + 10 =$

$18 + 3 =$

$19 + 12 =$

$16 + 12 =$

$15 + 4 =$

$23 + 4 =$

$22 + 10 =$

$20 + 2 =$

$18 + 4 =$

$15 + 5 =$

$10 + 7 =$

$15 + 4 =$

$14 + 2 =$

$18 + 5 =$

$20 + 5 =$

$18 + 6 =$

$18 + 2 =$


$10 + 5 =$



Name: _____


Froggy

Draw a picture about your favorite part of the book.



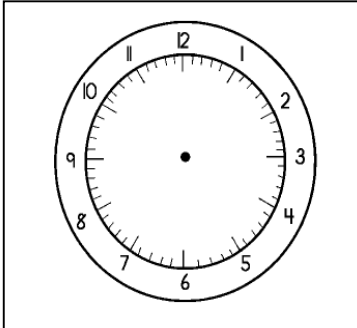
Write about your favorite part from the book.

Name: _____

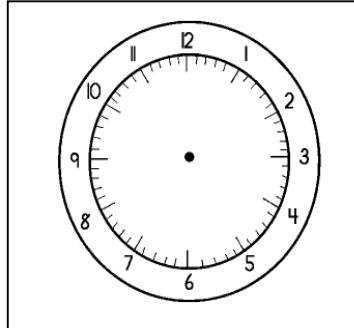


Telling Time

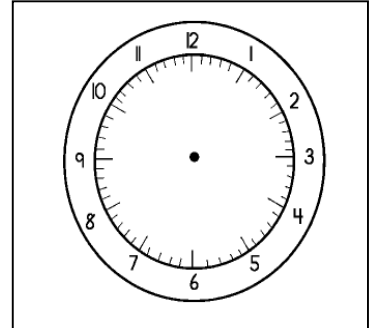
Draw the hands on the clock to match the time.



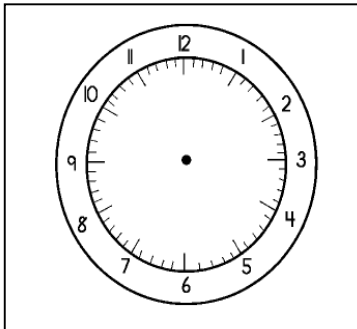
6:55



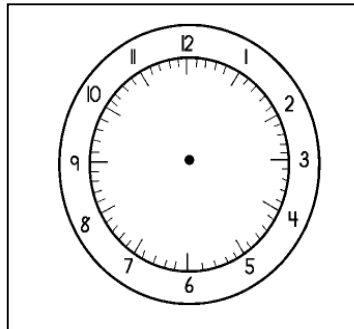
3:25



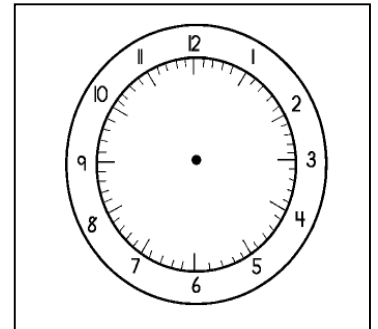
4:35



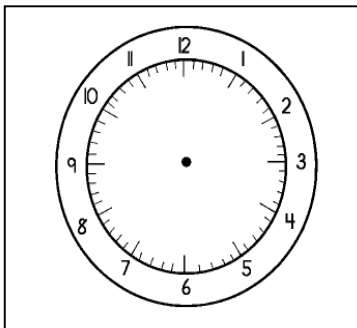
9:15



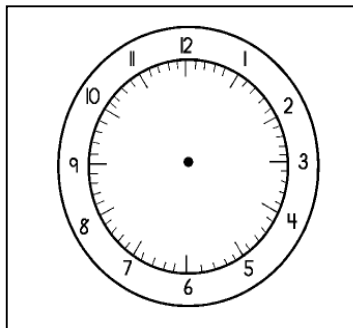
10:12



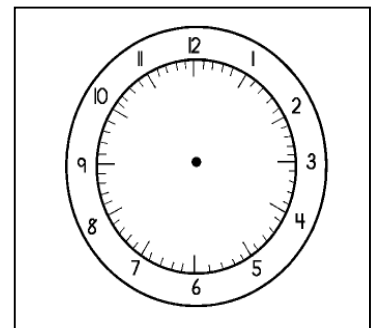
7:57



5:17



10:23



8:45

Name: _____

Subtraction Facts

Cut out Froggy to help you find the answers!

$10 - 3 =$

$10 - 1 =$

$8 - 2 =$

$6 - 2 =$

$8 - 5 =$

$10 - 3 =$

$7 - 4 =$

$8 - 5 =$

$9 - 1 =$

$9 - 2 =$


$10 - 3 =$

$8 - 7 =$

$10 - 5 =$

$9 - 6 =$

$4 - 1 =$



Name: _____

Date: _____

Addition Facts

$$\begin{array}{r} 45 \\ + 23 \\ \hline \end{array}$$

$$\begin{array}{r} 55 \\ + 15 \\ \hline \end{array}$$

$$\begin{array}{r} 35 \\ + 18 \\ \hline \end{array}$$

$$\begin{array}{r} 18 \\ + 10 \\ \hline \end{array}$$



$$\begin{array}{r} 22 \\ + 71 \\ \hline \end{array}$$

$$\begin{array}{r} 33 \\ + 32 \\ \hline \end{array}$$

$$\begin{array}{r} 22 \\ + 42 \\ \hline \end{array}$$

$$\begin{array}{r} 27 \\ + 32 \\ \hline \end{array}$$

$$\begin{array}{r} 32 \\ + 25 \\ \hline \end{array}$$

$$\begin{array}{r} 17 \\ + 12 \\ \hline \end{array}$$

$$\begin{array}{r} 14 \\ + 18 \\ \hline \end{array}$$

$$\begin{array}{r} 13 \\ + 17 \\ \hline \end{array}$$

$$\begin{array}{r} 20 \\ + 22 \\ \hline \end{array}$$

$$\begin{array}{r} 22 \\ + 12 \\ \hline \end{array}$$

$$\begin{array}{r} 22 \\ + 5 \\ \hline \end{array}$$

$$\begin{array}{r} 25 \\ + 12 \\ \hline \end{array}$$

$$\begin{array}{r} 20 \\ + 5 \\ \hline \end{array}$$

$$\begin{array}{r} 16 \\ + 9 \\ \hline \end{array}$$

$$\begin{array}{r} 17 \\ + 11 \\ \hline \end{array}$$

$$\begin{array}{r} 13 \\ + 10 \\ \hline \end{array}$$

$$\begin{array}{r} 19 \\ + 11 \\ \hline \end{array}$$

$$\begin{array}{r} 20 \\ + 22 \\ \hline \end{array}$$

$$\begin{array}{r} 25 \\ + 22 \\ \hline \end{array}$$

$$\begin{array}{r} 31 \\ + 8 \\ \hline \end{array}$$

$$\begin{array}{r} 15 \\ + 12 \\ \hline \end{array}$$

$$\begin{array}{r} 28 \\ + 24 \\ \hline \end{array}$$


$$\begin{array}{r} 33 \\ + 22 \\ \hline \end{array}$$

$$\begin{array}{r} 25 \\ + 22 \\ \hline \end{array}$$

Name: _____

Date: _____

Addition Facts



$$\begin{array}{r} 825 \\ +223 \\ \hline \end{array}$$

$$\begin{array}{r} 636 \\ + 337 \\ \hline \end{array}$$

$$\begin{array}{r} 785 \\ + 454 \\ \hline \end{array}$$

$$\begin{array}{r} 126 \\ + 125 \\ \hline \end{array}$$

$$\begin{array}{r} 996 \\ +302 \\ \hline \end{array}$$

$$\begin{array}{r} 963 \\ +562 \\ \hline \end{array}$$

$$\begin{array}{r} 856 \\ +555 \\ \hline \end{array}$$

$$\begin{array}{r} 676 \\ + 212 \\ \hline \end{array}$$

$$\begin{array}{r} 441 \\ + 555 \\ \hline \end{array}$$

$$\begin{array}{r} 445 \\ + 431 \\ \hline \end{array}$$

$$\begin{array}{r} 514 \\ +728 \\ \hline \end{array}$$

$$\begin{array}{r} 873 \\ + 843 \\ \hline \end{array}$$

$$\begin{array}{r} 683 \\ + 422 \\ \hline \end{array}$$

$$\begin{array}{r} 522 \\ +342 \\ \hline \end{array}$$

$$\begin{array}{r} 122 \\ +326 \\ \hline \end{array}$$

$$\begin{array}{r} 325 \\ + 262 \\ \hline \end{array}$$

$$\begin{array}{r} 445 \\ + 625 \\ \hline \end{array}$$

$$\begin{array}{r} 836 \\ + 369 \\ \hline \end{array}$$

$$\begin{array}{r} 587 \\ + 123 \\ \hline \end{array}$$

$$\begin{array}{r} 993 \\ + 222 \\ \hline \end{array}$$

$$\begin{array}{r} 589 \\ + 301 \\ \hline \end{array}$$

$$\begin{array}{r} 201 \\ +452 \\ \hline \end{array}$$

$$\begin{array}{r} 325 \\ +572 \\ \hline \end{array}$$

$$\begin{array}{r} 501 \\ +478 \\ \hline \end{array}$$

$$\begin{array}{r} 105 \\ +782 \\ \hline \end{array}$$

$$\begin{array}{r} 328 \\ + 881 \\ \hline \end{array}$$

$$\begin{array}{r} 533 \\ + 622 \\ \hline \end{array}$$

$$\begin{array}{r} 555 \\ + 52 \\ \hline \end{array}$$

Name: _____

Date: _____

Addition Facts

Fill in the missing numbers to complete the problems.

$$\begin{array}{r} 7__ \\ + 94 \\ \hline 173 \end{array}$$

$$\begin{array}{r} 3__ \\ + 18 \\ \hline 50 \end{array}$$

$$\begin{array}{r} 6__ \\ + 29 \\ \hline 92 \end{array}$$



$$\begin{array}{r} 2__ \\ + 35 \\ \hline 62 \end{array}$$

$$\begin{array}{r} 2__ \\ + 23 \\ \hline 51 \end{array}$$

$$\begin{array}{r} 1__ \\ + 78 \\ \hline 97 \end{array}$$

$$\begin{array}{r} 4__ \\ + 65 \\ \hline 114 \end{array}$$

$$\begin{array}{r} 7__ \\ + 65 \\ \hline 139 \end{array}$$

$$\begin{array}{r} 5__ \\ + 34 \\ \hline 92 \end{array}$$

$$\begin{array}{r} 8__ \\ + 2 \\ \hline 94 \end{array}$$

$$\begin{array}{r} 2__ \\ + 89 \\ \hline 113 \end{array}$$

$$\begin{array}{r} 7__ \\ + 5 \\ \hline 86 \end{array}$$

$$\begin{array}{r} 8__ \\ + 2 \\ \hline 93 \end{array}$$

$$\begin{array}{r} 5__ \\ + 5 \\ \hline 77 \end{array}$$

Name: _____


Date: _____

Title of Story: _____

Author: _____

Story Map

<u>Main Characters</u>		<u>Setting</u>
<u>Problem of Story</u>		
<u>A Story Event</u>		
<u>How the Problem Is Solved</u>		
<u>The Ending</u>		




Name: _____

Date: _____

My Adventures with Froggy!



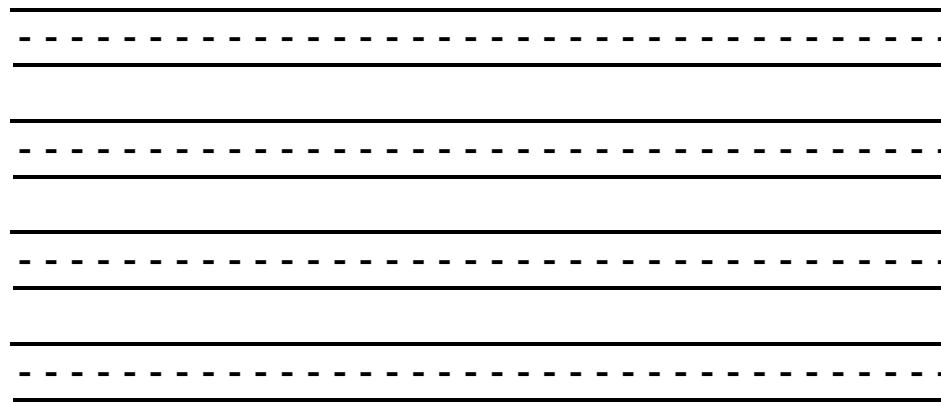
Write a story about an adventure with Froggy and his friends.

Illustrate your story:



Write your story:

Handwriting practice lines consisting of ten sets of three horizontal lines (top solid, middle dashed, bottom solid).



Name: _____

Date: _____

Addition Word Problems

Solve the addition word problems. Show your work in the box!

1. Franklin read 18 books. Beaver read 5 books. How many books did they read in all?

2. Franklin brought 14 toys to school. He lost 8 toys. How many toys does he have now?

3. Bear read 11 books. Franklin read 16. Beaver read 7. How many did they read total?

4. Franklin practiced kicking 20 soccer balls. 5 went over the goal. 4 went beside the goal. How many soccer balls went in the goal?



Name: _____

Date: _____

Put the words related to Froggy in alphabetical order.

Froggy

school

Frog

Max

hop

school

croak

1. _____

2. _____


3. _____

4. _____

5. _____

6. _____

7. _____



Name: _____

Date: _____

