

Miss Nelson is
Missing!




Love2teach

Name: _____

Directions: Create a "Missing" poster for Miss Nelson.

MISSING!



Who: _____

Last Time Seen: _____


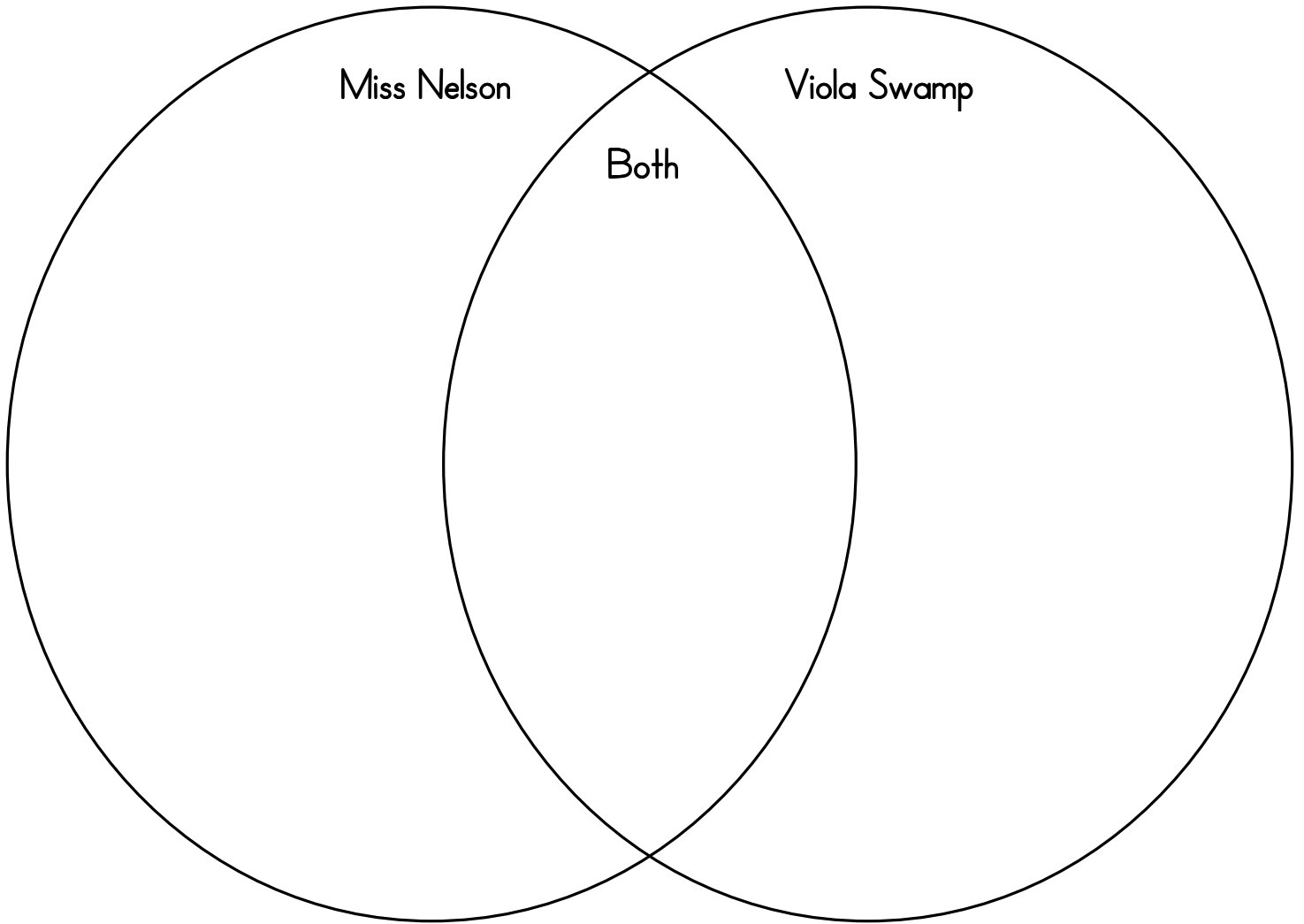
Description: _____

Reward: _____

Name: _____

Compare and Contrast Miss Nelson to Miss Viola Swamp.

Miss Nelson is Missing



Name: _____

Date: _____

Title of Story: _____

Author: _____

Story Map

<u>Main Characters</u>	<u>Setting</u>
<u>Problem of Story</u>	
<u>A Story Event</u>	
<u>How the Problem Is Solved</u>	
<u>The Ending</u>	



Name: _____

Date: _____

Write what you think happens next in the story?

Things to think about:

1. Do the students start to act out again?
2. Did the students learn their lesson?
3. What happens to Miss Viola Swamp?
4. What happens to the detective?
5. Where was Miss Nelson?

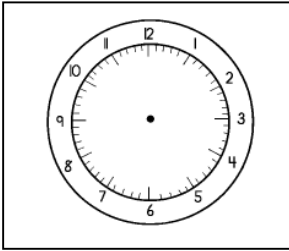


Handwriting practice lines consisting of multiple sets of three horizontal lines (top, middle dashed, bottom) for writing.

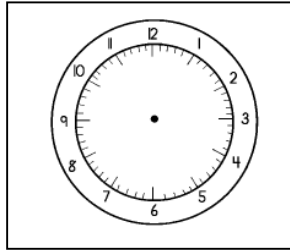
Name: _____

Date: _____

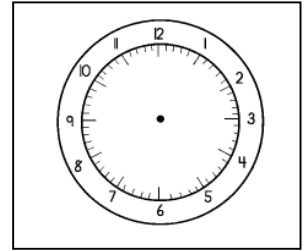
Draw the hands to match the time.



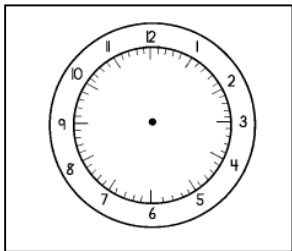
10:57



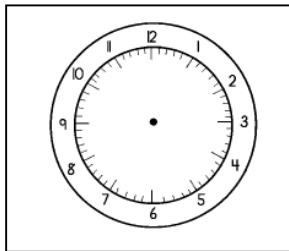
6:33



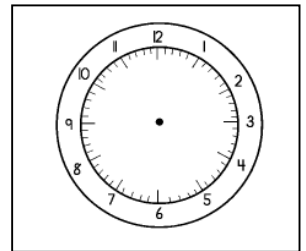
12:13



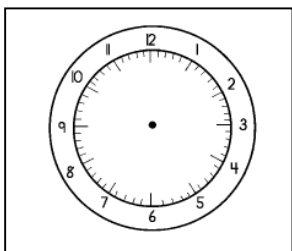
6:17



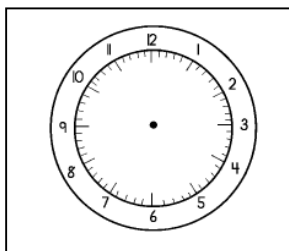
8:45




1:12



9:48



10:45



Name: _____

Date: _____

Multiplication Facts

$4 \times 9 =$

$10 \times 5 =$

$12 \times 3 =$

$12 \times 11 =$

$8 \times 4 =$

$8 \times 9 =$

$12 \times 5 =$

$9 \times 9 =$

$12 \times 4 =$

$6 \times 7 =$

$8 \times 6 =$

$4 \times 9 =$

$5 \times 6 =$

$3 \times 7 =$

$12 \times 5 =$

$3 \times 9 =$

$4 \times 5 =$

$5 \times 6 =$

$6 \times 6 =$

$3 \times 4 =$

$4 \times 6 =$

$11 \times 8 =$

$5 \times 5 =$


$8 \times 9 =$

$5 \times 7 =$

$5 \times 4 =$

$4 \times 8 =$

$10 \times 9 =$



Name: _____

Addition Facts

$20 + 3 =$

$15 + 13 =$

$17 + 5 =$

$10 + 2 =$

$24 + 2 =$

$12 + 13 =$

$15 + 11 =$

$12 + 10 =$

$8 + 12 =$

$14 + 14 =$

$15 + 25 =$

$36 + 6 =$

$15 + 4 =$

$23 + 12 =$


$19 + 10 =$

$16 + 12 =$

$22 + 14 =$

$14 + 7 =$

$20 + 12 =$



Name: _____

Subtraction Facts

$13 - 5 =$

$12 - 10 =$

$17 - 5 =$

$16 - 12 =$

$4 - 12 =$

$15 - 3 =$

$25 - 4 =$

$22 - 10 =$

$18 - 2 =$

$14 - 4 =$

$15 - 5 =$

$16 - 7 =$

$15 - 4 =$

$13 - 5 =$

$19 - 6 =$

$20 - 5 =$

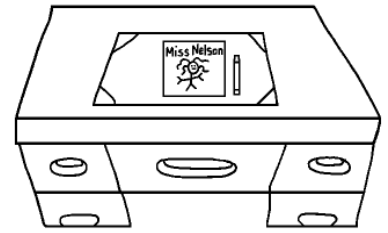
$12 - 6 =$

$18 - 2 =$

$10 - 5 =$

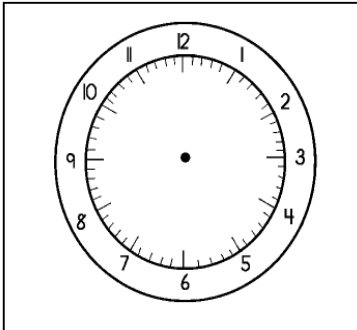


Name: _____

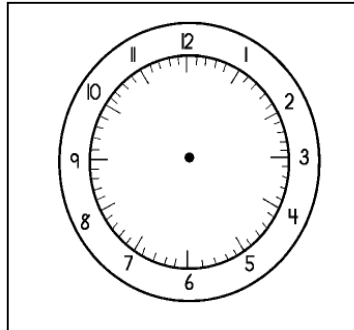


Telling Time

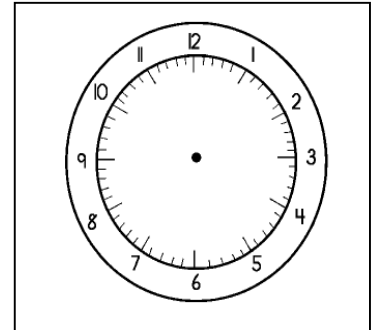
Draw the hands on the clock to match the time.



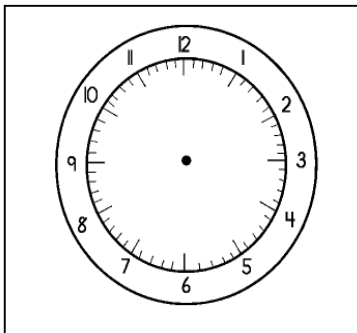
4:15



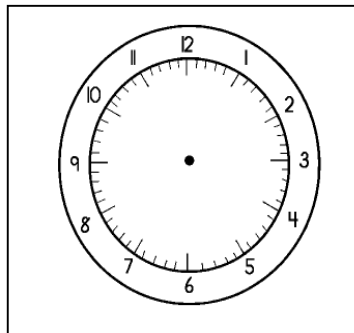
2:30



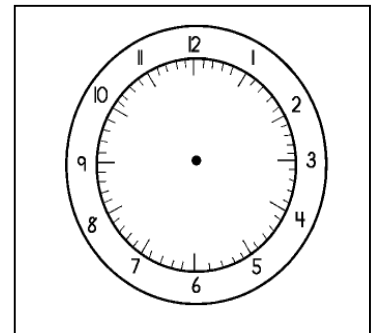
1:15



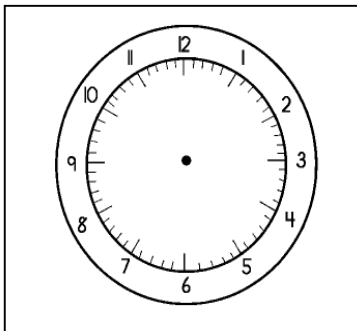
10:45



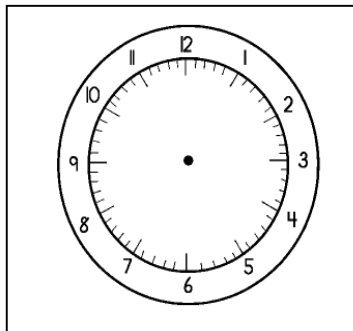
12:30



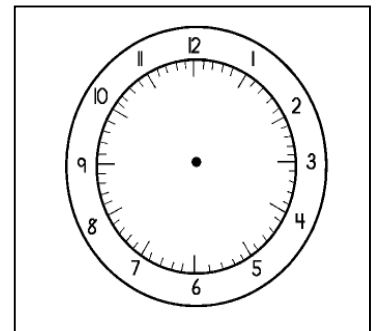
6:15



11:20



9:10



3:40

Name: _____

Addition Facts

Cut out Viola Swamp to help you find the answers!

$9 + 3 =$

$10 + 1 =$

$8 + 2 =$

$10 + 2 =$

$4 + 5 =$

$6 + 3 =$

$4 + 4 =$

$5 + 2 =$

$8 + 1 =$

$9 + 2 =$


$7 + 3 =$

$9 + 3 =$

$11 + 5 =$

$13 + 3 =$

$14 + 1 =$



Name: _____

Date: _____


Addition Facts

$$\begin{array}{r} 325 \\ +452 \\ \hline \end{array}$$

$$\begin{array}{r} 936 \\ + 211 \\ \hline \end{array}$$

$$\begin{array}{r} 985 \\ + 164 \\ \hline \end{array}$$

$$\begin{array}{r} 609 \\ + 51 \\ \hline \end{array}$$



$$\begin{array}{r} 396 \\ +402 \\ \hline \end{array}$$

$$\begin{array}{r} 463 \\ +422 \\ \hline \end{array}$$

$$\begin{array}{r} 652 \\ +402 \\ \hline \end{array}$$

$$\begin{array}{r} 676 \\ + 212 \\ \hline \end{array}$$

$$\begin{array}{r} 625 \\ + 412 \\ \hline \end{array}$$

$$\begin{array}{r} 445 \\ + 431 \\ \hline \end{array}$$

$$\begin{array}{r} 514 \\ +728 \\ \hline \end{array}$$

$$\begin{array}{r} 873 \\ + 217 \\ \hline \end{array}$$

$$\begin{array}{r} 683 \\ + 22 \\ \hline \end{array}$$

$$\begin{array}{r} 522 \\ +342 \\ \hline \end{array}$$

$$\begin{array}{r} 122 \\ +326 \\ \hline \end{array}$$

$$\begin{array}{r} 325 \\ + 262 \\ \hline \end{array}$$

$$\begin{array}{r} 811 \\ +172 \\ \hline \end{array}$$

$$\begin{array}{r} 256 \\ + 244 \\ \hline \end{array}$$

$$\begin{array}{r} 366 \\ +442 \\ \hline \end{array}$$

$$\begin{array}{r} 693 \\ + 201 \\ \hline \end{array}$$

$$\begin{array}{r} 589 \\ + 301 \\ \hline \end{array}$$

$$\begin{array}{r} 201 \\ +452 \\ \hline \end{array}$$

$$\begin{array}{r} 325 \\ +572 \\ \hline \end{array}$$

$$\begin{array}{r} 501 \\ +478 \\ \hline \end{array}$$

$$\begin{array}{r} 105 \\ +781 \\ \hline \end{array}$$

$$\begin{array}{r} 328 \\ + 671 \\ \hline \end{array}$$

$$\begin{array}{r} 333 \\ + 622 \\ \hline \end{array}$$

$$\begin{array}{r} 555 \\ + 52 \\ \hline \end{array}$$

Name: _____

Date: _____

Addition Facts

Fill in the missing numbers to complete the problems.

$$\begin{array}{r} 2__ \\ + 5 \\ \hline 74 \end{array}$$

$$\begin{array}{r} 3__ \\ + 4 \\ \hline 56 \end{array}$$

$$\begin{array}{r} 8__ \\ + 2 \\ \hline 103 \end{array}$$



$$\begin{array}{r} 2__ \\ + 2 \\ \hline 69 \end{array}$$

$$\begin{array}{r} 5__ \\ + 5 \\ \hline 110 \end{array}$$

$$\begin{array}{r} 4__ \\ + 1 \\ \hline 89 \end{array}$$

$$\begin{array}{r} 5__ \\ + 4 \\ \hline 86 \end{array}$$

$$\begin{array}{r} 7__ \\ + 7 \\ \hline 99 \end{array}$$

$$\begin{array}{r} 3__ \\ + 1 \\ \hline 44 \end{array}$$

$$\begin{array}{r} 8__ \\ + 2 \\ \hline 94 \end{array}$$

$$\begin{array}{r} 1__ \\ + 7 \\ \hline 34 \end{array}$$

$$\begin{array}{r} 6__ \\ + 5 \\ \hline 86 \end{array}$$

$$\begin{array}{r} 7__ \\ + 2 \\ \hline 93 \end{array}$$

$$\begin{array}{r} 4__ \\ + 5 \\ \hline 77 \end{array}$$




Name: _____

Date: _____

Write about what you would do if Viola Swamp came to your classroom.



Handwriting practice lines consisting of multiple sets of three horizontal lines (top solid, middle dashed, bottom solid) for writing.



Name: _____

Date: _____

